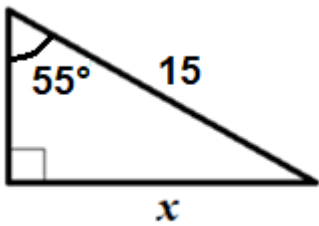


(arrondir si nécessaire à 0,1 près)

Exercice 1 :

Calculer la longueur x



.....

.....

.....

.....

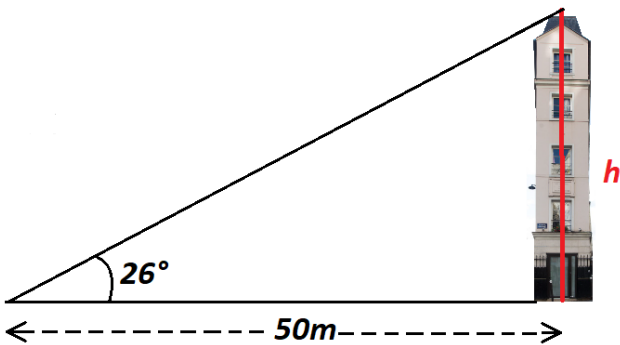
.....

.....

.....

Exercice 3 :

Calculer la hauteur h de l'immeuble



.....

.....

.....

.....

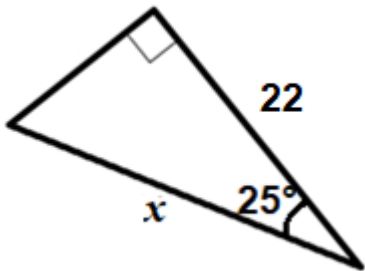
.....

.....

.....

Exercice 2 :

Calculer la longueur x



.....

.....

.....

.....

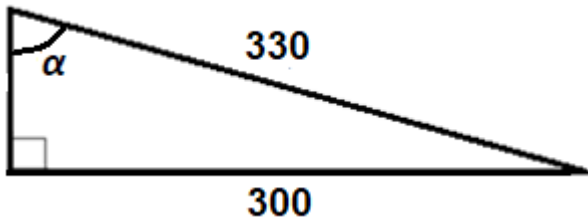
.....

.....

.....

Exercice 4 :

Calculer l'angle α



.....

.....

.....

.....

.....

.....

.....