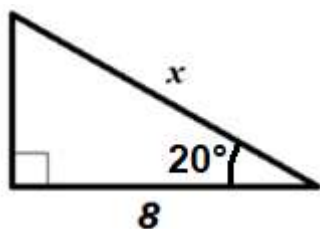


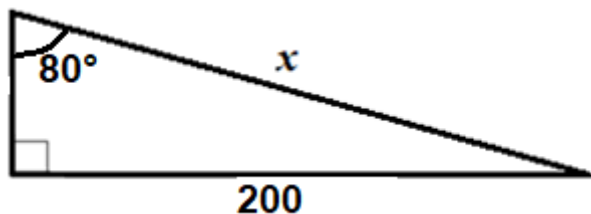
### Exercice 1 :

Calculer la longueur  $x$

[illegible]

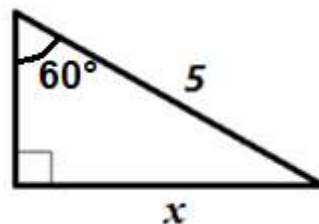
### Exercice 3 :

Calculer la longueur  $x$

This image shows a full page of white paper with ten horizontal dashed lines, typical of primary school handwriting practice paper. The lines are evenly spaced and extend across the width of the page. There is no text or other markings on the paper.

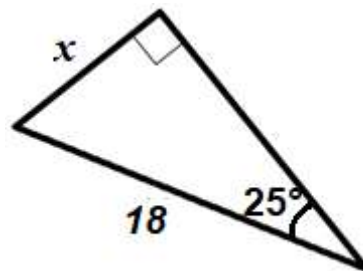
### Exercice 2 :

Calculer la longueur  $x$

[illegible]


### Exercice 4 :

Calculer la longueur  $x$

[illegible]

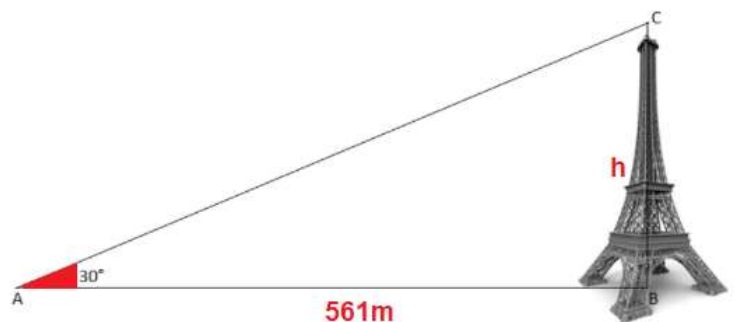
**exercice 5 :**

Calculer la longueur en rouge de cet escalier



**exercice 6 :**

Calculer la hauteur de la tour Eiffel



**exercice 7 :**

Calculer la hauteur de la cathédrale de Chartres

